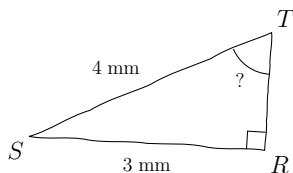
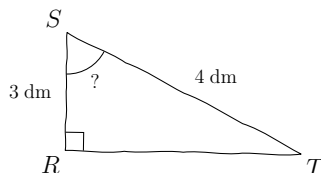


Compétence travaillée	Difficulté	Socle commun	Nombre d'erreurs
Calculs trigonométriques	★☆☆☆☆		

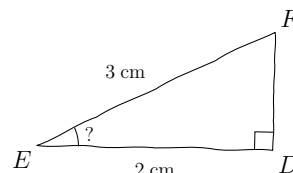
1) Calculer  $\widehat{RTS}$ , au centième près



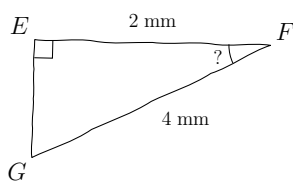
2) Calculer  $\widehat{RST}$ , au degré près



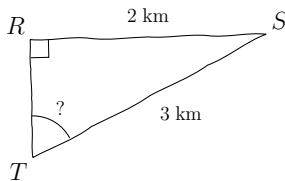
3) Calculer  $\widehat{DEF}$ , au degré près



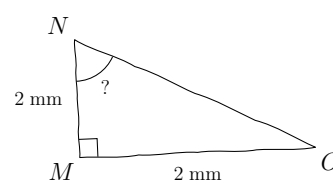
4) Calculer  $\widehat{EFG}$ , au degré près



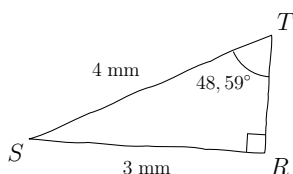
5) Calculer  $\widehat{RTS}$ , au centième près



6) Calculer  $\widehat{MNO}$ , au centième près

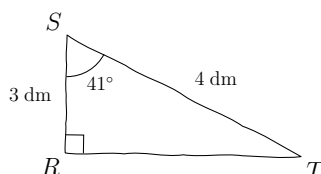


1)  $\widehat{RTS} = 48,59^\circ$  au centième près



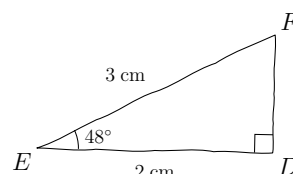
Utilisation de la touche  $\boxed{\text{SIN}^{-1}}$

2)  $\widehat{RST} = 41^\circ$  au degré près



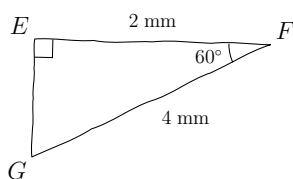
Utilisation de la touche  $\boxed{\text{COS}^{-1}}$

3)  $\widehat{DEF} = 48^\circ$  au degré près



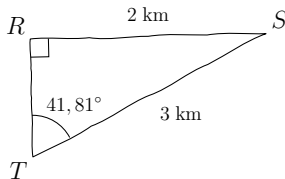
Utilisation de la touche  $\boxed{\text{COS}^{-1}}$

4)  $\widehat{EFG} = 60^\circ$  au degré près



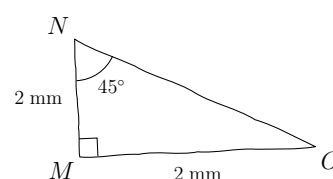
Utilisation de la touche  $\boxed{\text{COS}^{-1}}$

5)  $\widehat{RTS} = 41,81^\circ$  au centième près



Utilisation de la touche  $\boxed{\text{SIN}^{-1}}$

6)  $\widehat{MNO} = 45^\circ$  au centième près



Utilisation de la touche  $\boxed{\text{TAN}^{-1}}$