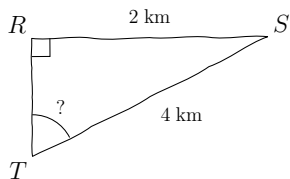
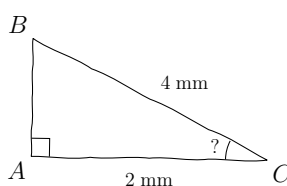


| Compétence travaillée | Difficulté | Socle commun | Nombre d'erreurs |
|--------------------------|------------|--------------|------------------|
| Calculs trigonométriques | ★☆☆☆☆ | | |

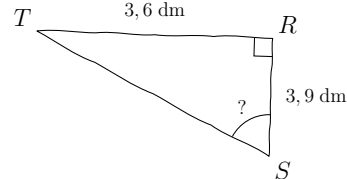
1) Calculer \widehat{RTS} , au dixième près



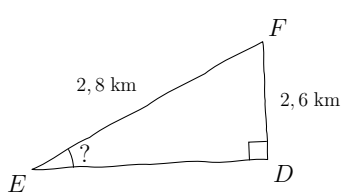
2) Calculer \widehat{ACB} , au degré près



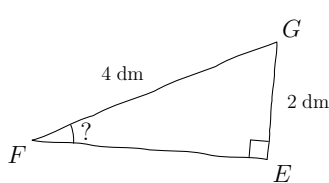
3) Calculer \widehat{RST} , au centième près



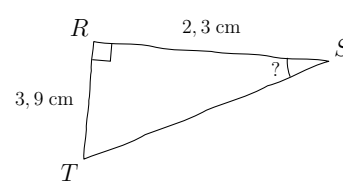
4) Calculer \widehat{DEF} , au centième près



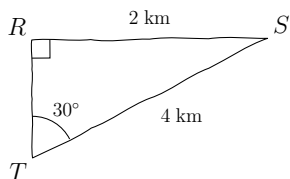
5) Calculer \widehat{EFG} , au degré près



6) Calculer \widehat{RST} , au degré près

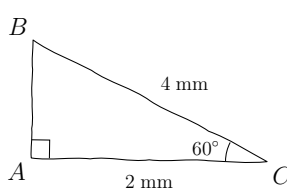


1) $\widehat{RTS} = 30^\circ$ au dixième près



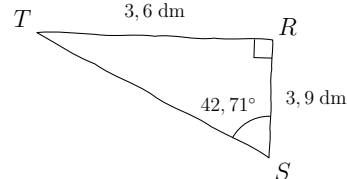
Utilisation de la touche $\boxed{\text{SIN}^{-1}}$

2) $\widehat{ACB} = 60^\circ$ au degré près



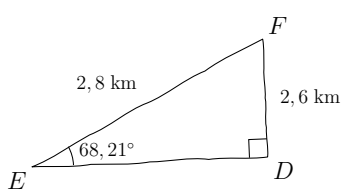
Utilisation de la touche $\boxed{\text{COS}^{-1}}$

3) $\widehat{RST} = 42,71^\circ$ au centième près



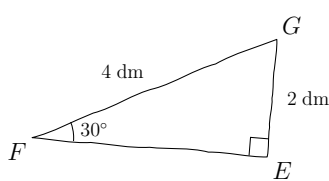
Utilisation de la touche $\boxed{\text{TAN}^{-1}}$

4) $\widehat{DEF} = 68,21^\circ$ au centième près



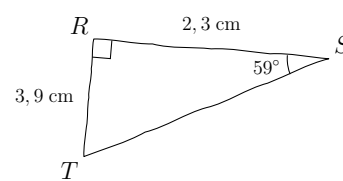
Utilisation de la touche $\boxed{\text{SIN}^{-1}}$

5) $\widehat{EFG} = 30^\circ$ au degré près



Utilisation de la touche $\boxed{\text{SIN}^{-1}}$

6) $\widehat{RST} = 59^\circ$ au degré près



Utilisation de la touche $\boxed{\text{TAN}^{-1}}$